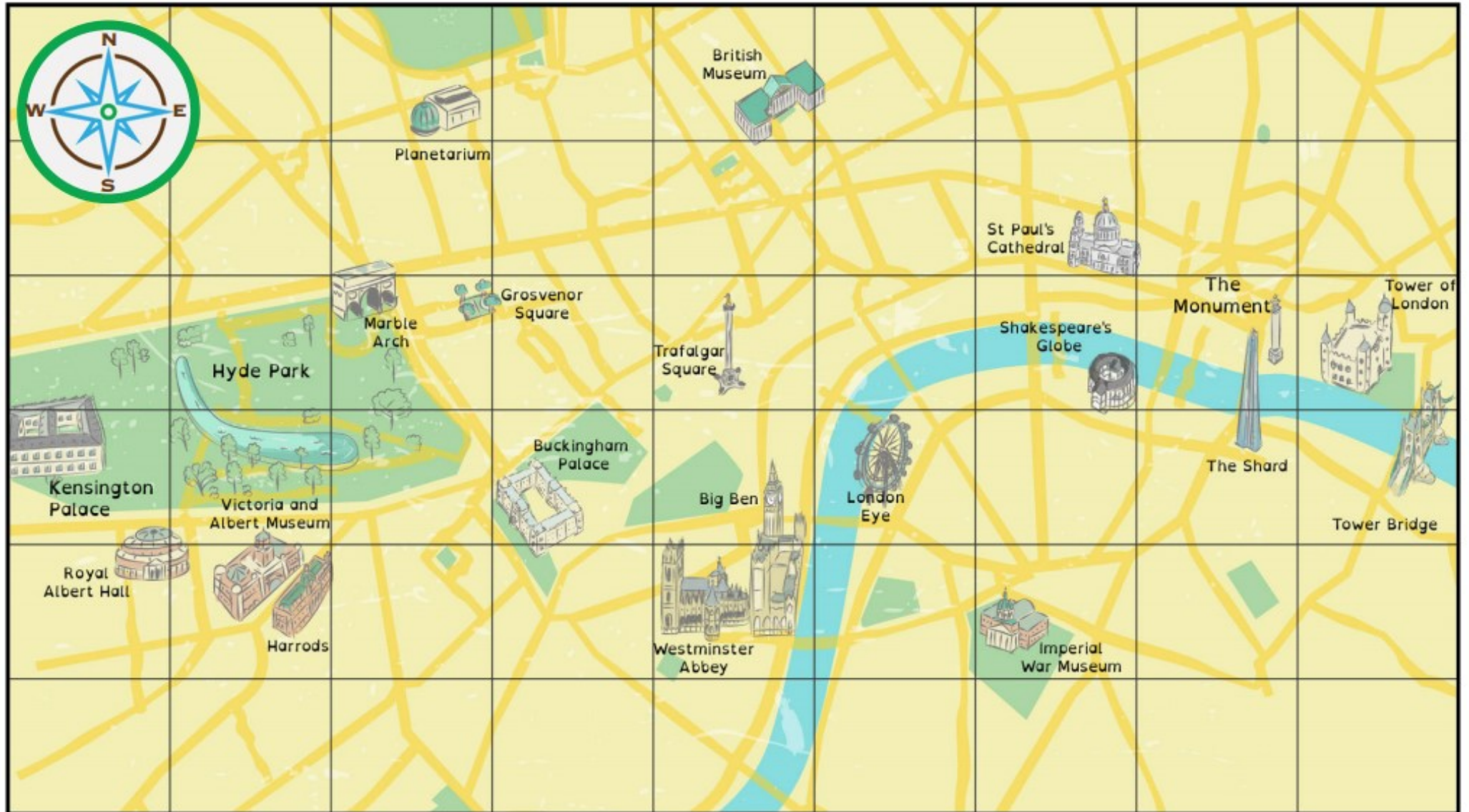



# Map of London




27.1.21

## Maps and Compass Points

How can you get from...?




to




**St Paul's Cathedral**      **The Tower of London**

Answer:

How can you get from...?




to




**Buckingham Palace**      **The London Eye**

Answer:

How can you get from...?




to




**Kensington Palace**      **Big Ben**

Answer:

How can you get from...?



to



**The Planetarium**      **The Tower of London**

Answer:



### These are the sights James wants to visit:

- ✓ The London Eye
- ✓ Tower of London
- ✓ British Museum
- ✓ Buckingham Palace
- ✓ Harrods

Work out the best way to move around the map to see all these sights.

Use directional language, like 'three squares north' or 'two squares south'.

Read your directions to a friend to see if they get to all the right places!

**Good luck!**

Now try these... .

## Plan a route

If you went to London, which places would you visit. Plan a route (and write directions) to include all your favourite landmarks.



## Play 'Where am I?'

Choose a place on the map to hide. Draw or write the landmark on a piece of paper. Tell your partner (or family member) where to start (at a different landmark) then give them directions to find you. Can they find your hiding place?

